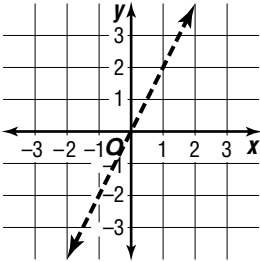


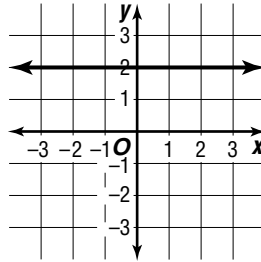
Practice

Graphing Inequalities in Two Variables**Shade the appropriate half-plane to complete the graph of each inequality.**

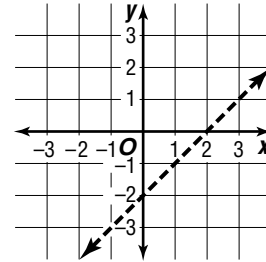
1. $y > 2x$



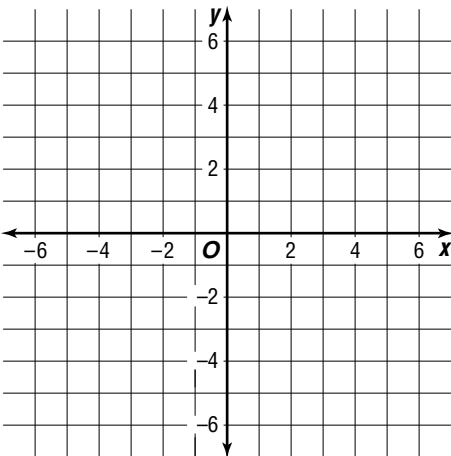
2. $y \leq 2$



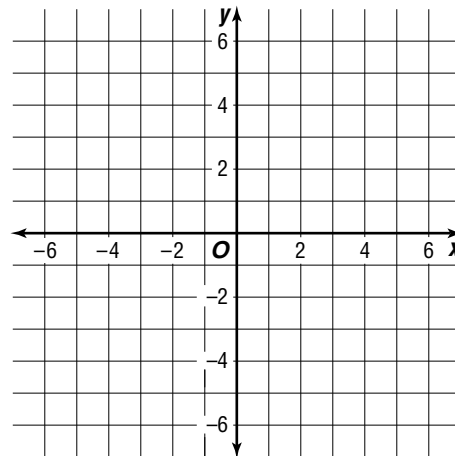
3. $y - x < -2$

**Graph each inequality.**

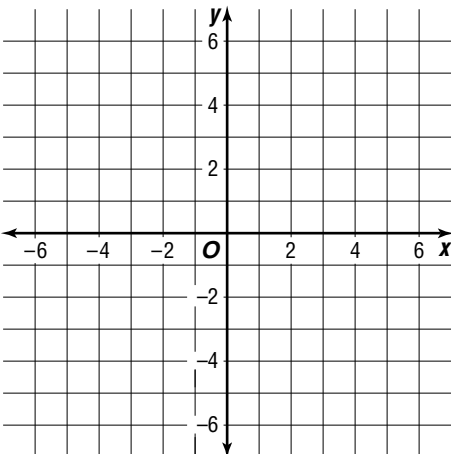
4. $y - x \leq 4$



5. $2x + y > 5$



6. $x + 2y < -6$



7. $2x - y \leq 4$

