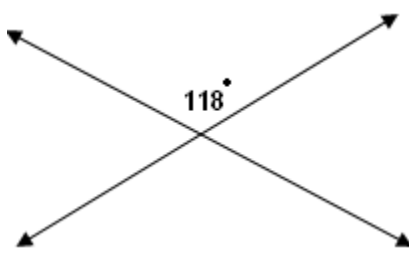
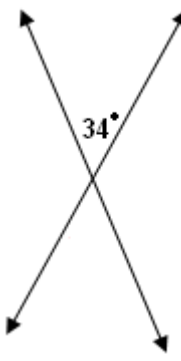
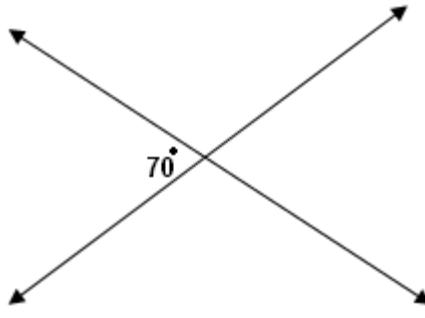
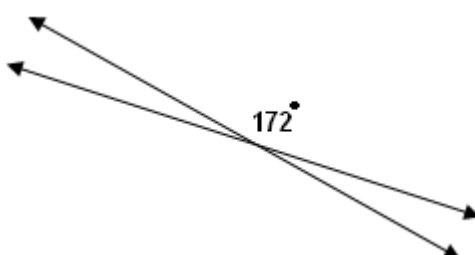
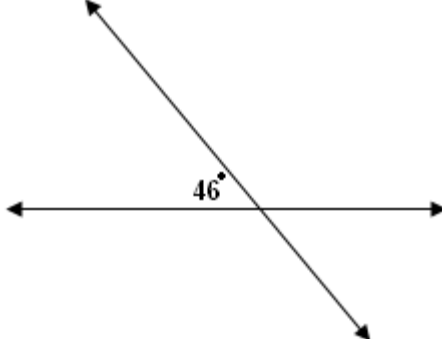
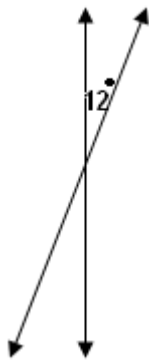


Student Name: _____

Score: _____

Vertical Angles Worksheet

Write all the missing angles:

| | |
|---|--|
|  <p>Two intersecting lines. The top-right angle is labeled 118°.</p> |  <p>Two intersecting lines. The top-right angle is labeled 34°.</p> |
|  <p>Two intersecting lines. The top-left angle is labeled 70°.</p> |  <p>Two intersecting lines. The top-right angle is labeled 172°.</p> |
|  <p>Two intersecting lines. The top-left angle is labeled 46°.</p> |  <p>Two intersecting lines. The top-right angle is labeled 12°.</p> |

Student Name: _____

Score: _____

Answers

